



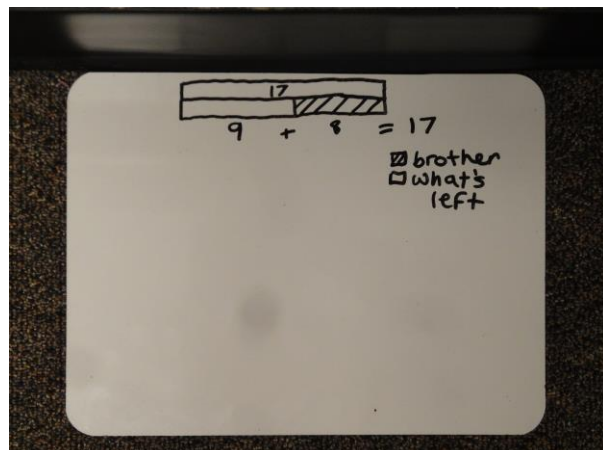
TAPE DIAGRAMS

Engage NY Progression
with Tape Diagrams

SHELLS AT THE BEACH

Kiana found some shells at the beach. She gave 8 shells to her brother. Now she has 9 shells left. How many shells did Kiana find at the beach?

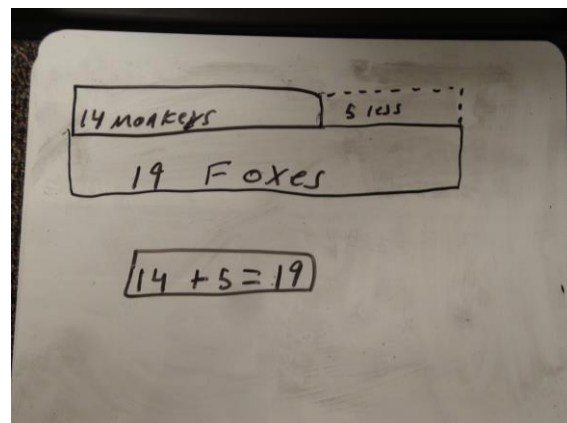
Source: Engage NY



MONKEYS AND FOXES

Rose saw 14 monkeys at the zoo. She saw 5 fewer monkeys than foxes. How many foxes did Rose see?

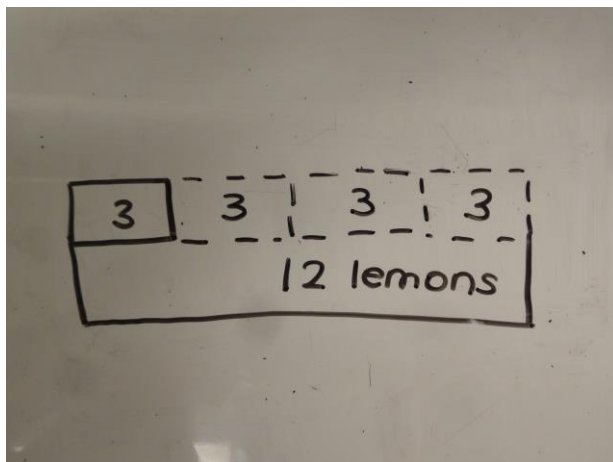
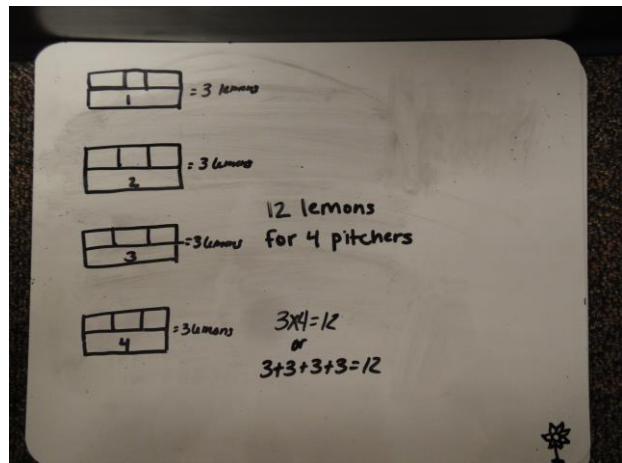
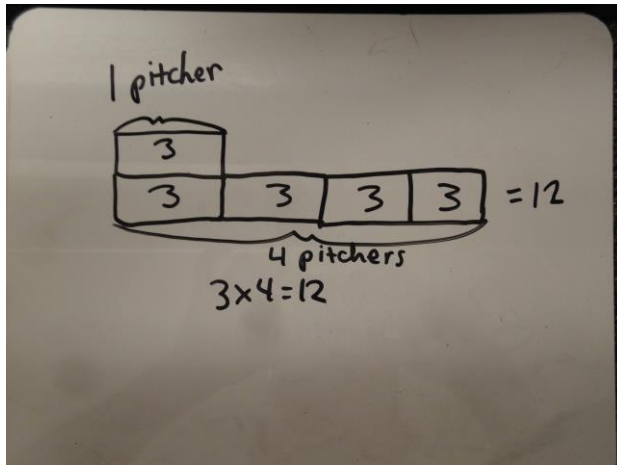
Source: Engage NY



LEMONADE

Jordan uses 3 lemons to make 1 pitcher of lemonade. He makes 4 pitchers. How many lemons does he use all together?

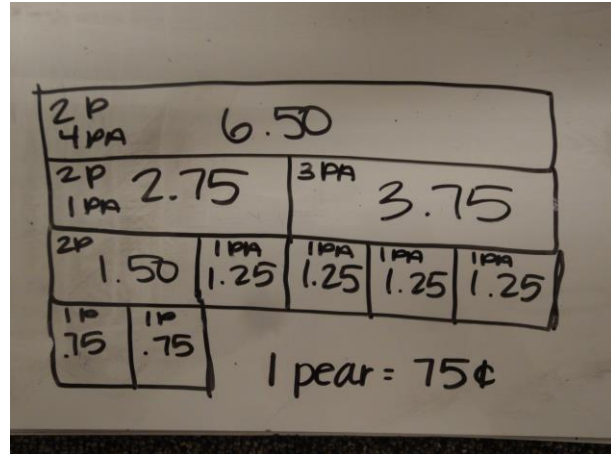
Source: Engage NY



PEARS & PINEAPPLES

Two pears and 1 pineapple costs \$2.75. Two pears and 4 pineapples cost \$6.50. What is the cost of 1 pear?

Source: Engage NY



PAPER CUPS

Henry bought 280 blue and red paper cups. He used $\frac{1}{3}$ of the blue ones and $\frac{1}{2}$ of the red ones at a party. If he had an equal number of blue cups and red cups left, how many cups did he use altogether?

Source: Engage NY

